

NCERT SOLUTIONS

CLASS - 7TH



aglasem.com

Class : 7th

Subject : Science

Chapter : 1

Chapter Name : Nutrition in Plants

Q1 Why do organisms take food?

Answer. All living organisms require food to survive. It gives them energy to perform various activities. All activities such as playing, running, walking, studying, etc. require energy. The various components present in our food such as carbohydrates, proteins, fats, vitamins, and minerals provide energy to our body. These are also important for growth and development of the body.

Page : 9 , Block Name : Exercise

Q2 Distinguish between a parasite and a saprotroph.

Answer.

Parasite	Saprotroph
The organism that grows on the body of another organism and derives nutrients from it is known as a parasite.	The organism that obtains nutrients from the dead or decaying organic matter is called saprotroph.
Examples of parasites are Cuscuta and orchids.	Examples of saprotrophs are fungi and some bacteria.

Page : 9 , Block Name : Exercise

Q3 How would you test the presence of starch in leaves?

Answer. Experiment to test the presence of starch in leaves:

Take two healthy green potted plants of the same type. Keep one potted plant in a dark room for one or two days in order to remove all the starch from the leaves. Keep the other plant in sunlight. Now, take one leaf from each potted plant and put a few drops of iodine solution on them. Then note down the observation.



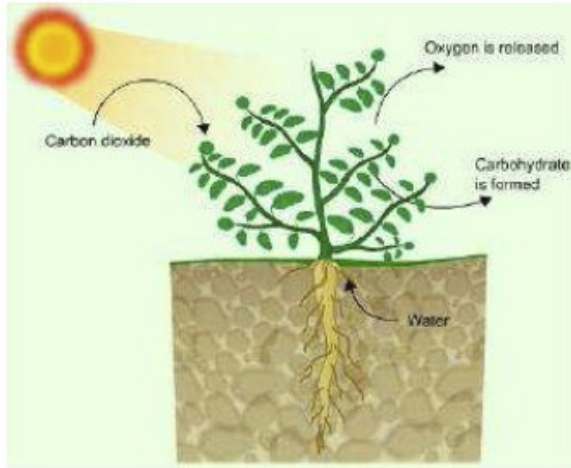
Plants kept in light and dark conditions

No blue black colour will be observed on the leaves of the plant kept in the dark room. This indicates the absence of starch. Blue black colour will be observed on the leaves of the plant kept in sunlight. This indicates the presence of starch.

Page : 9 , Block Name : Exercise

Q4 Give a brief description of the process of synthesis of food in green plants.

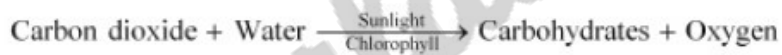
Answer. Photosynthesis is defined as the process in which the chlorophyll-containing plant cells synthesise food in the form of carbohydrates, using carbon dioxide and water in the presence of solar energy.



Photosynthesis containing chlorophyll. containing chlorophyll.

Sources of raw materials required for photosynthesis:

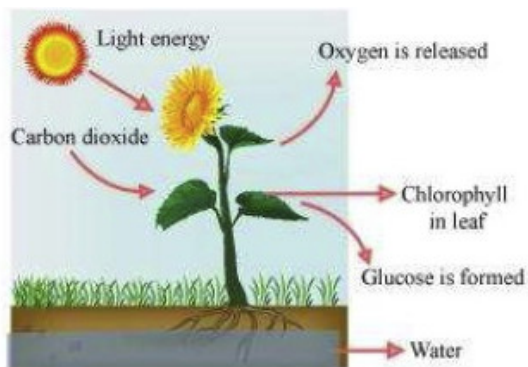
- Water is taken in from the roots of the plant and is transported to the leaves.
- Carbon dioxide from the air enters the leaves through the tiny pores called stomata and diffuses to the cells containing chlorophyll.
- Solar energy is used to break water into hydrogen and oxygen. This hydrogen is combined with carbon dioxide to form food for the plants, which is ultimately used by the animals as well. Thus, photosynthesis can be represented by the following equation.



Page : 9 , Block Name : Exercise

Q5 Show with the help of a sketch that plants are the ultimate source of food.

Answer.



Photosynthesis

Page : 9 , Block Name : Exercise

Q6 Fill in the blanks:

- (a) Green plants are called _____ since they synthesise their own food.
 (b) The food synthesised by plants is stored as _____.
 (c) In photosynthesis solar energy is absorbed by the pigment called _____.
 (d) During photosynthesis plants take in _____ and release _____ gas.

Answer. (a) Green plants are called autotrophs since they synthesise their own food.

(b) The food synthesised by the plants is stored as starch.

(c) In photosynthesis solar energy is captured by the pigment called chlorophyll.

(d) During photosynthesis plants take in carbon dioxide and release oxygen.

Page : 9 , Block Name : Exercise

Q7 Name the following:

- (i) A parasitic plant with yellow, slender and branched stem.
 (ii) A plant that is partially autotrophic.
 (iii) The pores through which leaves exchange gases.

Answer. (i) Cuscuta

(ii) Pitcher plant

(iii) Stomata

Q8 Tick the correct answer:

- (a) Cuscuta is an example of:
 (i) autotroph (ii) parasite (iii) saprotroph (iv) host
 (b) The plant which traps and feeds on insects is:
 (i) Cuscuta (ii) china rose (iv) pitcher plant (iv) rose

Answer. (a) parasite

(b) pitcher plant

Page : 9 , Block Name : Exercise

Q9 Match the items given in Column I with those in Column II.

Column I	Column II
Chlorophyll	Bacteria
Nitrogen	Heterotrophs
Amarbel	Pitcher plant
Animals	Leaf
Insects	Parasite

Answer.

Column I	Column II
Chlorophyll	Leaf
Nitrogen	Bacteria
Amarbel	Parasite
Animals	Heterotrophs
Insects	Pitcher plant

Page : 9 , Block Name : Exercise

Q10 Mark 'T' if the statement is true and 'F' if it is false:

- (i) Carbon dioxide is released during photosynthesis. (T/F)
- (ii) Plants which synthesise their food are called saprotrophs. (T/F)
- (iii) The product of photosynthesis is not a protein. (T/F)
- (iv) Solar energy is converted into chemical energy during photosynthesis. (T/F)

Answer: (i) Carbon dioxide is released during photosynthesis. (F)
(ii) Plants which synthesise their food themselves are called saprotrophs. (F)
(iii) The product of photosynthesis is not a protein. (T)
(iv) Solar energy is converted into chemical energy during photosynthesis. (T)

Page : 9 , Block Name : Exercise

Q11 Choose the correct option from the following:

Which part of the plant takes in carbon dioxide from the air for photosynthesis?

- (i) Root hair
- (ii) Stomata
- (iii) Leaf veins
- (iv) Sepals

Answer. (ii) Stomata

Page : 10 , Block Name : Exercise

Q12 Choose the correct option from the following:

Plants take carbon dioxide from the atmosphere mainly through their:

- (i) roots
- (ii) stem
- (iii) flowers
- (iv) leaves

Answer. (iv) leaves

Page : 10 , Block Name : Exercise

Q13 Why do farmers grow many fruits and vegetable crops inside large green houses? What are the advantages to the farmers?

Answer. Green house provide favourable conditions for these crops..like it gives always favourable

temperature. Farmers get many advantage like the crops grow well..it also protect it from high blowing wind,and rodents.

Page : 10 , Block Name : Exercise

aglasem.com